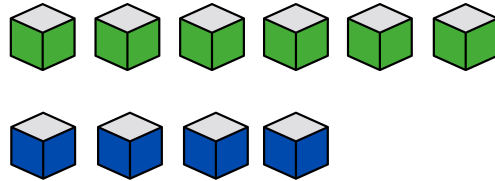



# Using Doubles

Read the problems out loud to your child if they cannot read. Prompt your child to see if they can find a double in each problem that can help them add.


(1) Karim has 6 green blocks and 4 blue blocks. How many blocks in total does he have?



(2) Gabby chooses 3 blue butterfly stickers and 5 orange butterfly stickers. How many butterfly stickers will be on Gabby's paper?



(3) There are 7 triangles and 6 rectangles. How many shapes are there altogether?



(4) Your turn to draw! Draw circles or another shape to show and solve:

$$5 + 8$$

$$3 + 4$$